



For Supervisor's use only

1

90152



NEW ZEALAND QUALIFICATIONS AUTHORITY  
MANA TOHU MĀTAURANGA O AOTEAROA



National Certificate of Educational Achievement  
TAUMATA MĀTAURANGA Ā-MOTU KUA TAEA

## Level 1 Mathematics, 2005

### 90152 Solve right-angled triangle problems

Credits: Two

9.30 am Monday 21 November 2005

Check that the National Student Number (NSN) on your admission slip is the same as the number at the top of this page.

You should answer ALL the questions in this booklet.

You should show ALL working.

If you need more space for any answer, use the page(s) provided at the back of this booklet and clearly number the question.

Check that this booklet has pages 2–8 in the correct order and that none of these pages is blank.

**YOU MUST HAND THIS BOOKLET TO THE SUPERVISOR AT THE END OF THE EXAMINATION.**

For Assessor's use only		Achievement Criteria			
Achievement		Achievement with Merit		Achievement with Excellence	
Solve right-angled triangle problems.	<input type="checkbox"/>	Solve problems in practical situations involving right-angled triangles.	<input type="checkbox"/>	Solve problems in word or 3D situations.	<input type="checkbox"/>
Overall Level of Performance <input type="checkbox"/>					

This page has been deliberately left blank.

You are advised to spend 30 minutes answering the questions in this booklet.

Assessor's  
use only

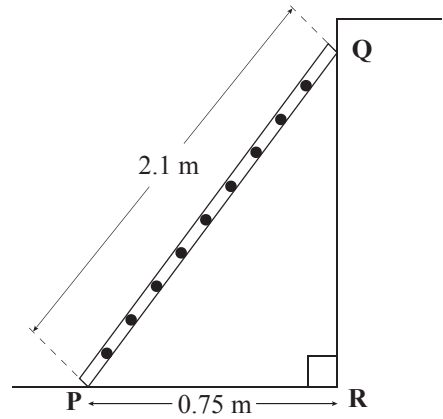
## THE SLEEP-OUT

You should show **ALL** working.

### QUESTION ONE

- (a) Andrew has a ladder 2.1 m long.  
He places it on level ground with the foot, **P**, 0.75 m from the wall.

Find the distance the ladder will reach up the wall,  
ie find **QR**.




---

---

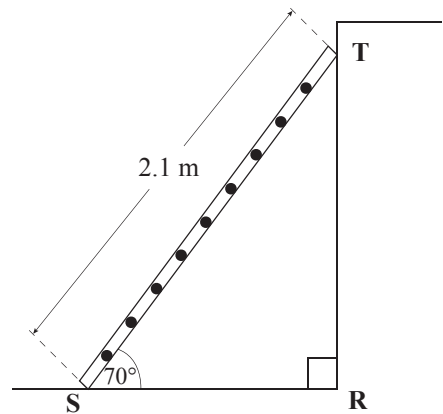
---

---

**QR** = \_\_\_\_\_ m

- (b) The ladder is moved so that it makes an angle of  $70^\circ$  with the level ground, ie the foot is now at **S**.

Find how far the foot of the ladder will be from the wall, ie find **SR**.




---

---

---

---

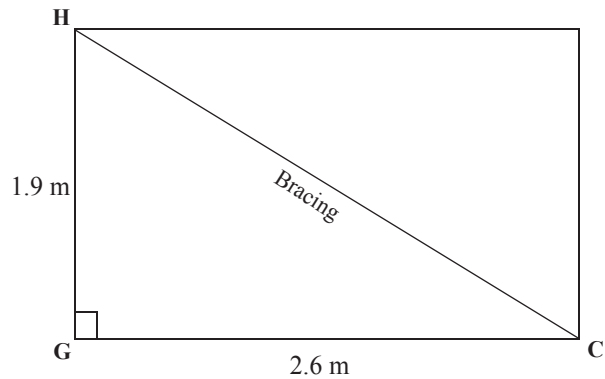
**SR** = \_\_\_\_\_ m

**QUESTION TWO**

Andrew is building a sleep-out.

- (a) One wall is 1.9 m high and 2.6 m long. The bracing is from the top left to the bottom right corners of the wall.

Calculate the length of bracing that will be required, ie find **HC**.




---

---

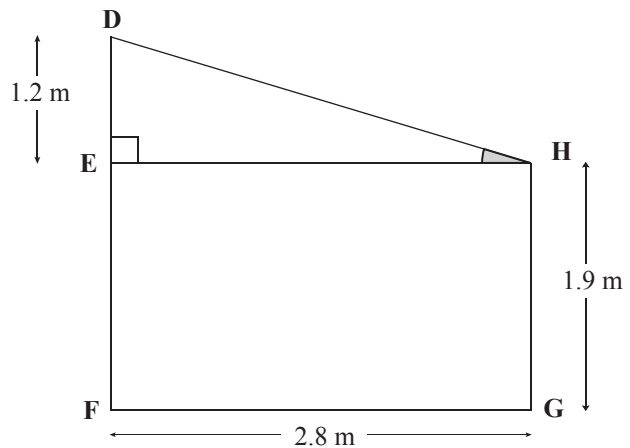
---

---

**HC** = \_\_\_\_\_ m

- (b) The sleep-out has a sloping roof, **DH**.  
**ED** = 1.2 m.  
**FG** = 2.8 m.  
**GH** = 1.9 m.

Find the angle the roof makes with the horizontal, ie find angle **EHD**.




---

---

---

---

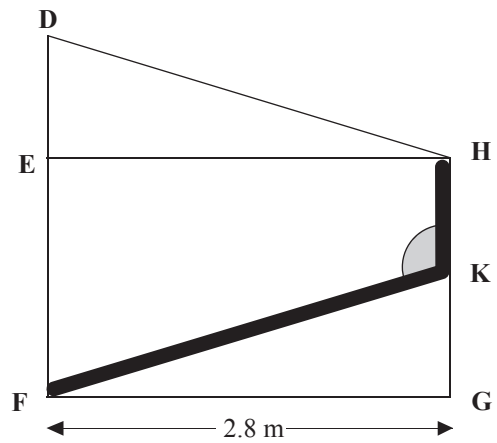
**Angle EHD** = \_\_\_\_\_ °

- (c) **KF** is part of a pipe that takes water from the roof to the storm-water drain.

$$FG = 2.8 \text{ m.}$$

$$FK = 3.03 \text{ m.}$$

Find the angle **HKF**.



Assessor's  
use only

Angle HKF = \_\_\_\_\_ °

- (d) **DJ** is a brace for the sloping roof of the sleep-out.

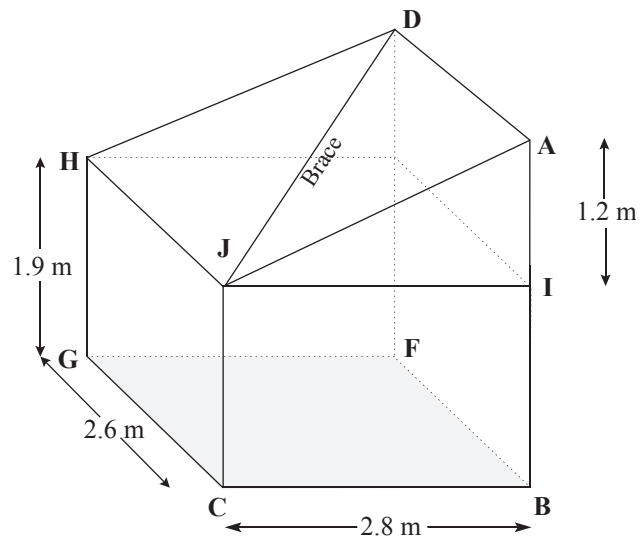
$$AI = 1.2 \text{ m.}$$

$$CB = 2.8 \text{ m.}$$

$$GC = 2.6 \text{ m.}$$

$$GH = 1.9 \text{ m.}$$

Calculate the length of the brace, **DJ**.

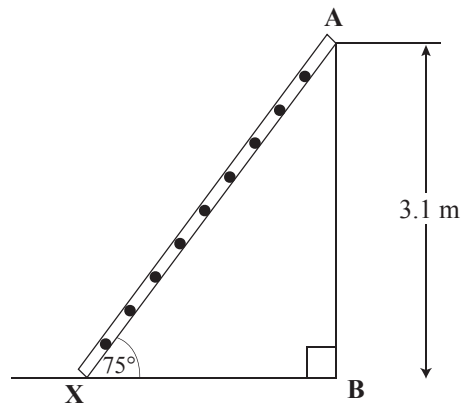


**DJ** = \_\_\_\_\_ m

**QUESTION THREE**

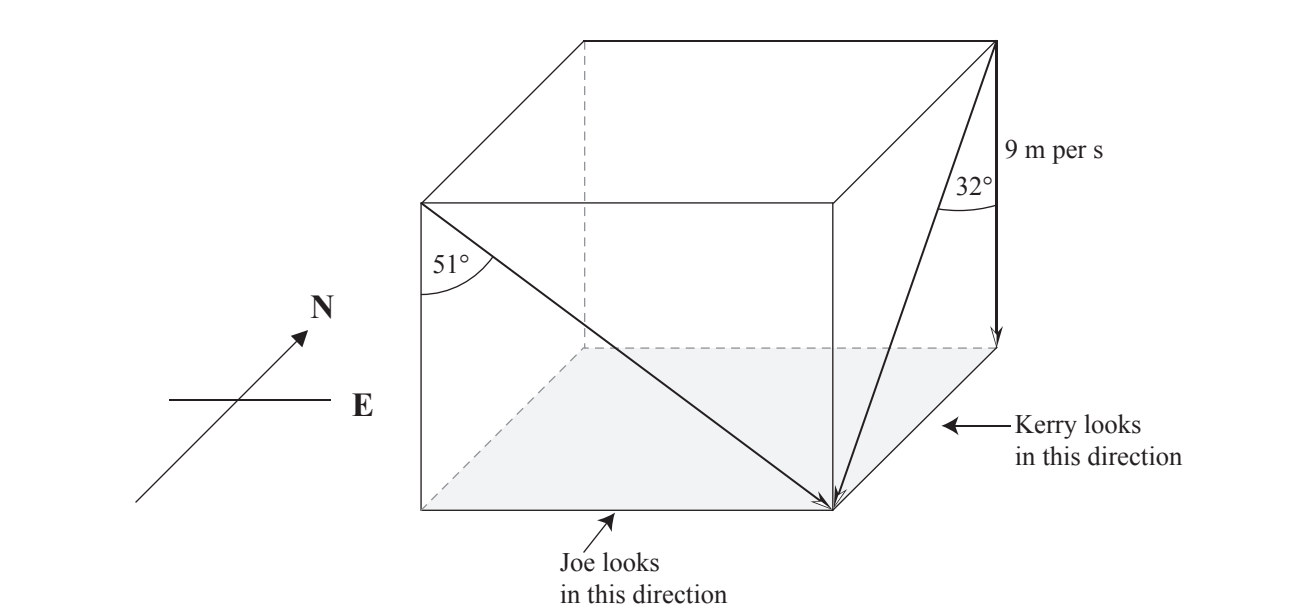
A safe angle for a ladder is  $75^\circ$  to the horizontal.

Calculate the length of ladder if it reaches 3.1 m above level ground, ie find **XA**.



Assessor's  
use only

**XA** = \_\_\_\_\_ m



The wind blowing makes the rain come down at an angle.

Joe and Kerry measure the angle of the falling rain at the same time.

To Joe, the rain appears to be falling towards the east at an angle of  $5^\circ$  to the vertical.

To Kerry, the rain appears to be falling towards the south at an angle of  $32^\circ$  to the verti

[illegible]

[illegible]